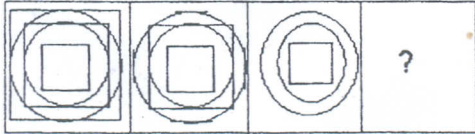
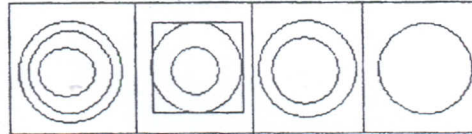


20)

PROBLEM FIGURES



ANSWER FIGURES



A) A

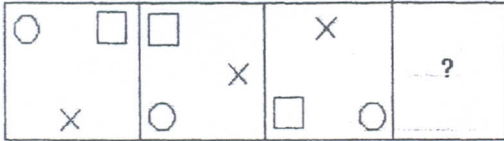
B) B

C) C

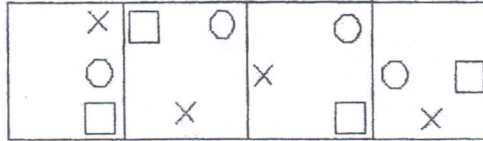
D) D

21)

PROBLEM FIGURES



ANSWER FIGURES



A) A

B) B


C) C

D) D

Directions for Questions 22-24:

Choose the image, which is similar to the problem image:

22)



Problem



A)



B)

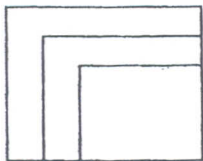


C)

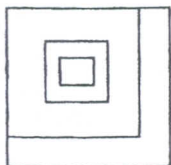


D)

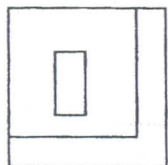
23)



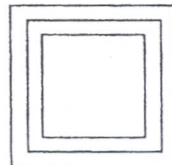
Problem



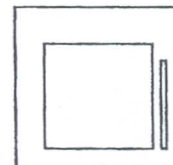
A)



B)



C)



D)